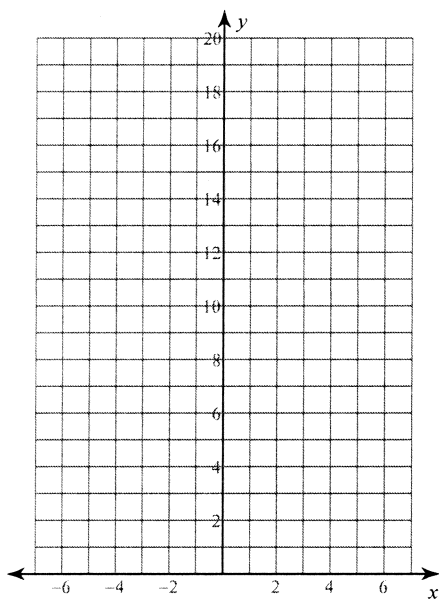


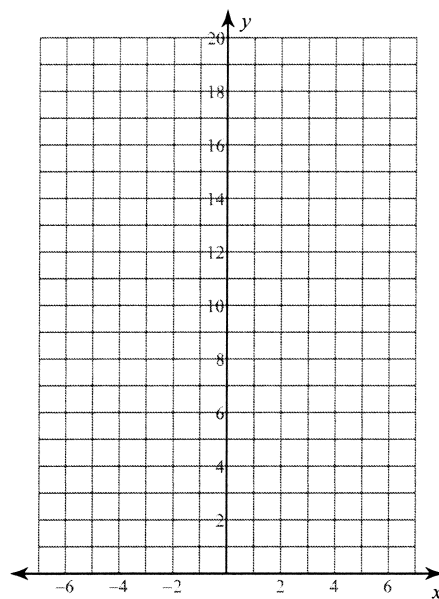
Graphing Exponential Functions

Sketch the graph of each function.

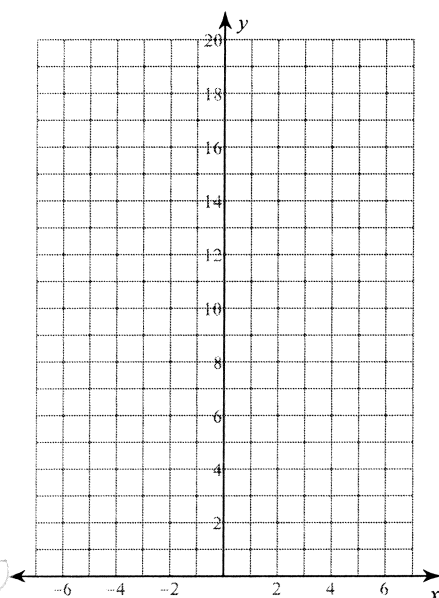
1) $y = 4 \cdot 2^x + 2$



2) $y = 5 \cdot 2^{x-2}$



3) $y = 4 \cdot \left(\frac{1}{2}\right)^x$



4) $y = 2 \cdot \left(\frac{1}{2}\right)^{x+1} + 3$

